


FRACTION DIVISION with RECTANGLE MODEL

First... what is division?

$8 \div 2$ means: _____

$15 \div 5$ means: _____


Example 1: $\frac{3}{4} \div \frac{2}{3} =$



Number Question:

Color Question:


Example 2: $1\frac{1}{2} \div \frac{2}{5} =$



Number Question:

Color Question:


Example 3: $\frac{2}{3} \div \frac{1}{2} =$



Number Question:

Color Question:

Example 4: $\frac{2}{5} \div \frac{3}{4} =$



Number Question:

Color Question: